









ЗАПОЛНИ ПРОПУСКИ

1	2		4	
	7	8		10

	<input type="text"/>		<input type="text"/>
	<input type="text"/>		<input type="text"/>

1		3		5
6			9	10

	<input type="text"/>		<input type="text"/>
	<input type="text"/>		<input type="text"/>

$7 - \square = 2$

$+ \square$
 4
 $=$

$\square - \square = 3$

$+ \square$
 2
 $=$

$\square - \square = 1$

$-$

$\square + 3 = 6$

$+ \square =$

6
 $=$

$\square + 7 = \square$

$\square - 8 = \square$

$2 + \square = 8$

$- \square$
 3
 $=$

$\square + 1 = \square$

$- \square$
 $=$



$- \square$
 4
 $=$

$5 - \square = \square$

$7 - 3 = \square$

$\square + 2 = \square$

 $+$ 5 $=$ $-$ 4 $=$

$\square + 1 = \square$

$6 + \square = \square$

 $-$ 2 $=$ $-$ \square $=$

$\square + 4 = \square$

$\square - 2 = \square$

 5 $-$ 3 $=$ $+$ 3 $=$

$\square + 4 = \square$

$2 + \square = \square$

 $+$

$\square - 5 = \square$

 $-$ 3 $=$ $-$ 3 $=$

$3 + \square = 5$

$\square + 4 = \square$

$\square + 4 = \square$



$3 + 2 = \square$

$\square + 4 = 8$

$+ 1 = \square$

$+ 5 = \square$

$6 + 2 = \square$

$3 + 2 = \square$

$\square + \square = \square$

$+ \square = \square$

$\square + \square = \square$

$\square + \square = 7$

$\square + \square = 7$

$+ \square = \square$

$6 + \square = 9$

$+ 4 = \square$

$4 + \square = 8$

$\square + 3 = \square$

$+ 2 = \square$

$+ 5 = \square$

$\square + \square = \square$





4	-	2	=	
+				-
				1
=				=

	-	7	=	2		+	8	=	
--	---	---	---	---	--	---	---	---	--

		+				-
	+	6	=			6
=				-		=

	-	5	=			-		=	5
--	---	---	---	--	--	---	--	---	---

-				+		=
1				3	-	=
=				=		
8		9	-		=	
						+
						5
						=

3	+	3	=	
---	---	---	---	--

	-	4	=	
--	---	---	---	--



$4 + 2 = \square$

$+$

$+$

$\square + \square = 8$

2

$+$

$=$

$=$

1

9

$\square + \square = 9$

$=$

$+$

$2 + \square = \square$

\square

$+$

$=$

2

$\square + \square = 7$

$=$

$\square + \square = 9$

$+$

$+$

6

2

1

$\square + 7 = \square$

$=$

$+$

$+$

$\square + 1 = \square$

$\square + \square = 2$

$=$

$=$

$\square + \square = 8$

7	-		=	2
---	---	--	---	---

2	+		=	8
---	---	--	---	---

+	
4	
=	

-	
3	
=	

	-		=	3
--	---	--	---	---

	+	1	=	
--	---	---	---	--

+	
2	
=	

-	
=	

	-		=	1
--	---	--	---	---



-	
---	--

	+	3	=	6
--	---	---	---	---

+			=	
---	--	--	---	--

	+	7	=	
--	---	---	---	--

=	
---	--

	-	8	=	
--	---	---	---	--

-	
4	
=	

5	-		=	
---	---	--	---	--

